

① Zeichne die folgenden Kreise in dein Heft.

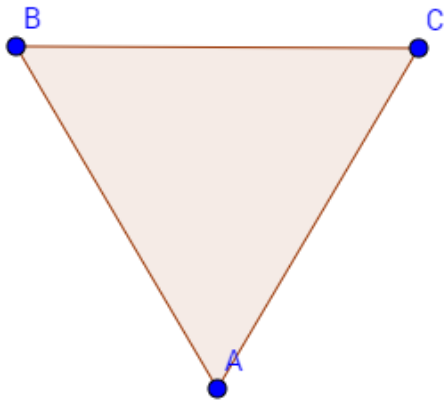
a) $r = 4\text{cm}$

b) $d = 5\text{cm}$

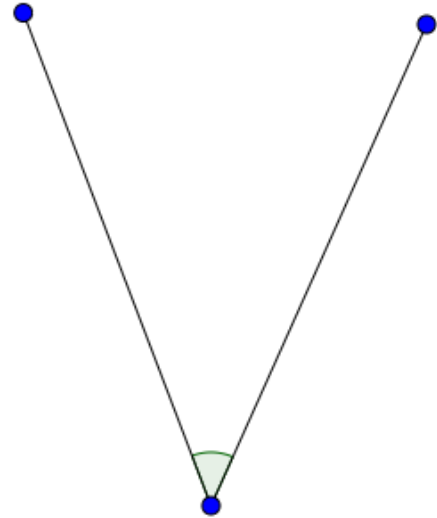
c) $r = 0,55\text{dm}$

② Bestimme die Winkel.

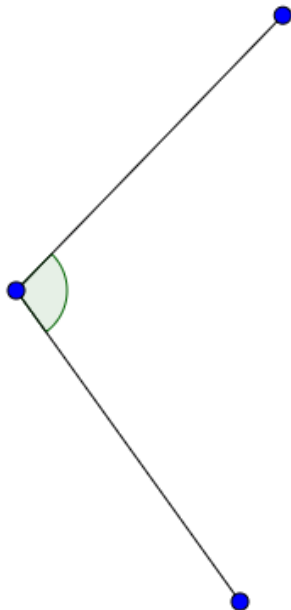
a)



b)



c)



③ Zeichne folgende Winkel

a) $\alpha = 60^\circ$

b) $\beta = 90^\circ$

c) $\gamma = 120^\circ$