

Thema 1: Addition

① Addiere und fülle die Lücken passend aus.

a) $9958 + 20 =$

$9958 + 12 =$

$99991 + 130 =$

b) $27 + \square = 98$

$\square + 33 = 149$

② Rechne vorteilhaft

a) $75 + 41 + 35 =$

$370 + 165 + 230 =$

$27 + 59 + 13 =$

b) $28 + 94 + 12 =$

$427 + 473 + 73 =$

$75 + 43 + 25 + 47 =$


③ Addiere schriftlich.

a) $647 + 182$


b) $7612 + 3458$

$2104 + 4739 +$

c) $519 =$



④ Fülle die Rechenmauern passend aus.



Thema 2: Subtraktion

⑤ Subtrahiere und fülle die Lücken passend aus.

a) $10005 - 25 =$

$10005 - 250 =$

$100004 - 19 =$

b) $170 - \square = 59$

$1001 - \square = 81$

$\square - 468 = 101$

⑥ Berechne. Achte auf die Klammern.

a) $66 - (11 + 33) =$

$107 + 37 - (35 + 66) =$

$506 - (308 + 68) =$

b) $(1000 - 599) =$


$395 - (36 - 12) =$

⑦ Subtrahiere schriftlich.

a) $874 - 436 =$

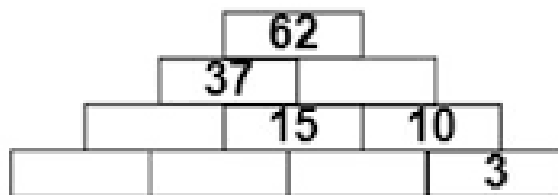
b) $69 - 17 - 23 =$

c) $9422 - 4685 =$

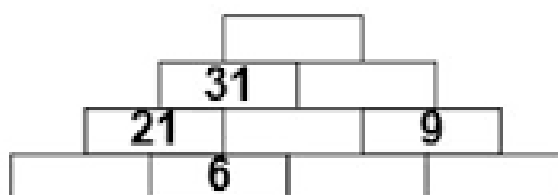


⑧ Vervollständige die Zahlenmauer.

a)



b)



Thema 3: Multiplikation

⑨ Berechne im Kopf.

a) $5 \cdot 9 \cdot 2 =$

b) $7 \cdot 4 \cdot 25 =$

c) $21 \cdot 13 =$


⑩ Multipliziere schriftlich.

a) $32 \cdot 4 =$

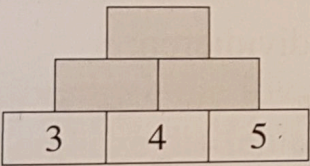
b) $56 \cdot 800 =$

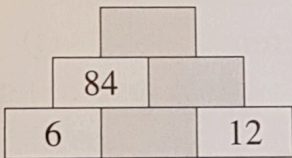
c) $5206 \cdot 5 =$

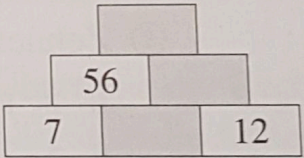
d) $125 \cdot 23 =$



⑪ Fülle die Multiplikationsmauern aus.

a) 

b) 

c) 

Thema 4: Division

⑫ Dividiere im Kopf.

a) $49 : 7 =$

b) $99 : 11 =$


c) $36 : 9 =$

⑬ Dividiere schriftlich.

a) $128 : 8 =$

b) $1925 : 5 =$

c) $2592 : 6 =$



⑭ Berechne.

a) $0 : 999 =$

b) $27 : (25 - 8 \cdot 2) =$

c) $3232 : 8 =$

