






## Station

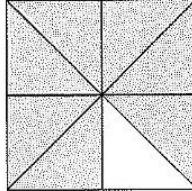




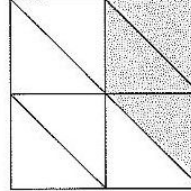


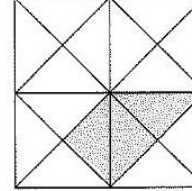
### Brüche erkennen

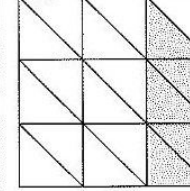
Welcher Bruchteil der Figur ist hier jeweils gekennzeichnet? Kreuze die passende Antwort an.  
Aus den Kennbuchstaben der richtigen Lösungen ergibt sich ein Lösungswort.











**A**

**K**  $\frac{3}{4}$

**S**  $\frac{4}{5}$

**H**  $\frac{9}{10}$

**B**

**M**  $\frac{6}{7}$

**A**  $\frac{7}{8}$

**C**  $\frac{7}{10}$

**C**

**H**  $\frac{3}{7}$

**R**  $\frac{3}{8}$

**T**  $\frac{3}{10}$

**D**

**N**  $\frac{3}{9}$

**L**  $\frac{3}{8}$

**I**  $\frac{3}{16}$


**E**

**N**  $\frac{5}{18}$


**O**  $\frac{5}{17}$

**U**  $\frac{5}{20}$




Lösungswort: **A B C D E**


 Stationenlernen Mathematik / 4. Schuljahr - Bestell-Nr. 11 398

anonym




## Station

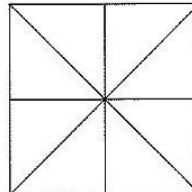


### Brüche färben

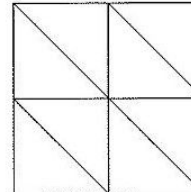
Färbe die angegebenen Brüche.



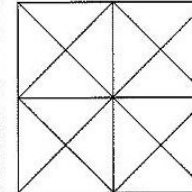
$\frac{3}{4}$



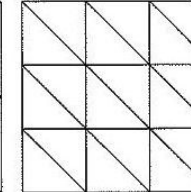
$\frac{1}{2}$




$\frac{5}{8}$



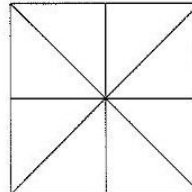
$\frac{11}{16}$



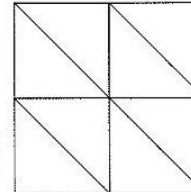
$\frac{1}{3}$



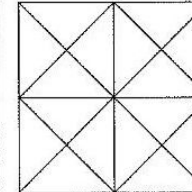
$\frac{2}{5}$



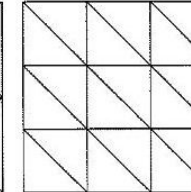
$\frac{7}{8}$



$\frac{1}{4}$



$\frac{9}{16}$




$\frac{7}{18}$

Mathematik

Seite 1/2

Angaben zu den Urhebern und Lizenzbedingungen der einzelnen Bestandteile dieses Dokuments finden Sie unter <https://www.tutory.de/entdecken/dokument/stationenlernen-mathematik-4-xxiii>



anonym