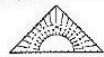






Station









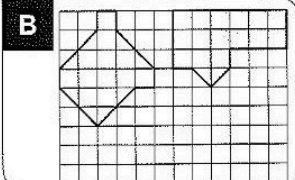
Zeichnen von Flächen gleichen Flächeninhalts

Zeichne eine weitere Fläche, die den gleichen Flächeninhalt hat.


A




B




C




D




E




F




G





H






I




 KOHL Stationenlernen Mathematik / 4. Schuljahr - Bestell-Nr. 11 398



Station

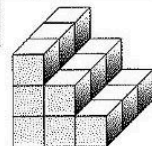






Würfel zählen

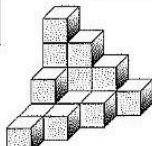
Wie viele Würfel sind es? Kreuze die richtige Anzahl an! Die Kennbuchstaben ergeben ein Lösungswort.

A



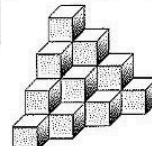
- K** 18 Würfel
- J** 19 Würfel
- L** 21 Würfel

B



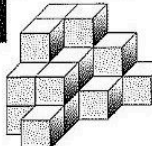
- A** 17 Würfel
- O** 19 Würfel
- E** 20 Würfel

C



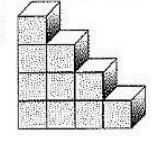
- S** 18 Würfel
- T** 20 Würfel
- U** 19 Würfel

D



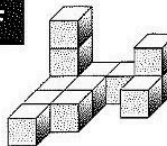
- H** 20 Würfel
- I** 22 Würfel
- S** 21 Würfel

E



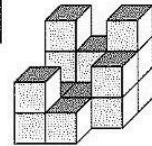
- I** 11 Würfel
- S** 12 Würfel
- R** 10 Würfel

F



- C** 12 Würfel
- I** 13 Würfel
- E** 11 Würfel

G



- L** 16 Würfel
- A** 14 Würfel
- N** 15 Würfel

Lösungswort:

A	B	C	D	E	F	G

Mathematik

Seite 1/2

Angaben zu den Urhebern und Lizenzbedingungen der einzelnen Bestandteile dieses Dokuments finden Sie unter <https://www.tutary.de/entdecken/dokument/stationenlernen-mathematik-4-xxx1>

