
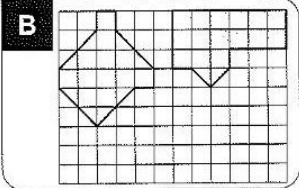


Station


Zeichnen von Flächen gleichen Flächeninhalts
 Zeichne eine weitere Fläche, die den gleichen Flächeninhalt hat.




A




B




C



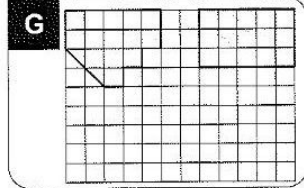
D




E




F



G



H



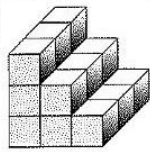
I

KOHL Stationenlernen Mathematik / 4. Schuljahr - Bestell-Nr. 11 398

Station

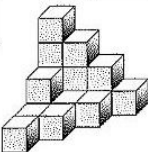
Würfel zählen
 Wie viele Würfel sind es? Kreuze die richtige Anzahl an! Die Kennbuchstaben ergeben ein Lösungswort.

A



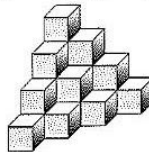
K 18 Würfel
J 19 Würfel
L 21 Würfel

B



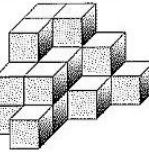
A 17 Würfel
O 19 Würfel
E 20 Würfel

C



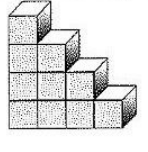
S 18 Würfel
T 20 Würfel
U 19 Würfel

D



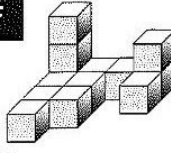
H 20 Würfel
I 22 Würfel
S 21 Würfel

E



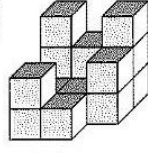
I 11 Würfel
S 12 Würfel
R 10 Würfel

F



C 12 Würfel
I 13 Würfel
E 11 Würfel

G



L 16 Würfel
A 14 Würfel
N 15 Würfel

Lösungswort:

A	B	C	D	E	F	G

