






Station




Brüche zuordnen

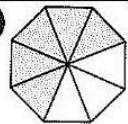
Welcher Bruchteil ist grau eingefärbt? Die Buchstaben bei den richtigen Antworten ergeben ein Lösungswort.

A 

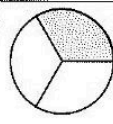
$\frac{3}{4}$ (H)
 $\frac{3}{5}$ (O)
 $\frac{2}{3}$ (W)

B 

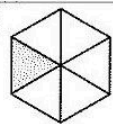
$\frac{1}{5}$ (R)
 $\frac{1}{3}$ (E)
 $\frac{2}{5}$ (Ü)

C 

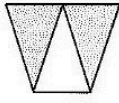
$\frac{5}{8}$ (H)
 $\frac{5}{10}$ (I)
 $\frac{4}{7}$ (L)

D 

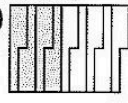
$\frac{1}{5}$ (T)
 $\frac{1}{3}$ (N)
 $\frac{1}{4}$ (O)

E 


$\frac{1}{6}$ (E)
 $\frac{1}{5}$ (W)
 $\frac{1}{7}$ (N)

F 

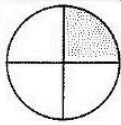
$\frac{2}{5}$ (U)
 $\frac{1}{3}$ (N)
 $\frac{2}{3}$ (R)

G 

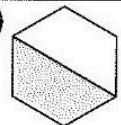
$\frac{4}{9}$ (A)
 $\frac{5}{9}$ (E)
 $\frac{4}{7}$ (N)

H 

$\frac{1}{3}$ (D)
 $\frac{3}{8}$ (U)
 $\frac{4}{5}$ (B)

I 


$\frac{1}{5}$ (E)
 $\frac{1}{3}$ (K)
 $\frac{1}{4}$ (G)

J 

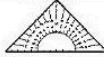



$\frac{1}{3}$ (L)
 $\frac{1}{2}$ (E)
 $\frac{5}{6}$ (R)


Lösungswort:

A	
B	
C	
D	
E	
F	
G	
H	
I	
J	



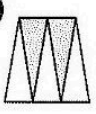
Station

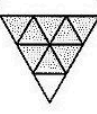









Brüche zuordnen

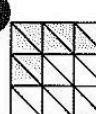
Ordne den dargestellten Brüchen die richtige Bruchzahl zu und verbinde die Aufgaben mit den zugehörigen Lösungen. Aus den Buchstaben, die auf den Verbindungslinien liegen, ergibt sich ein Lösungswort.

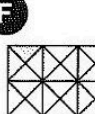
A 


B 

C 

D 

E 

F 

G 

K M O Ö N

S H V N P W E

A B C L N P W E

$\frac{8}{9}$ $\frac{9}{10}$ $\frac{2}{5}$ $\frac{5}{18}$ $\frac{5}{13}$ $\frac{7}{18}$ $\frac{1}{24}$

Lösungswort: **A B C D E F G**

--	--	--	--	--	--	--

