







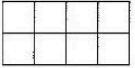
Station



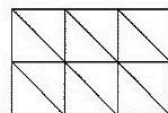




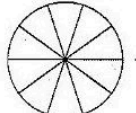
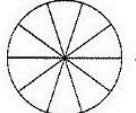
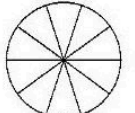
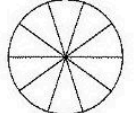


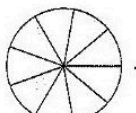
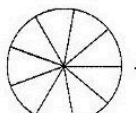
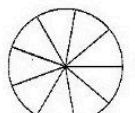
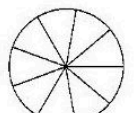
Subtraktion gleichnamiger Brüche


Wie lauten die Aufgaben zur Subtraktion von Brüchen? Was erhältst du als Ergebnis?
Färbe die entsprechenden Felder.

A  -  =  - - - - = - - - -




B  -  =  - - - - = - - - -


C  -  -  =  - - - - = - - - -

D  -  -  =  - - - - = - - - -



Station



Addition und Subtraktion gleichnamiger Brüche

Addiert bzw. subtrahiert die Brüche und tragt die Ergebnisse in die grauen Kästchen ein.

A $\frac{2}{9} + \frac{5}{9} =$	B $\frac{2}{7} + \frac{4}{7} =$	C $\frac{1}{3} + \frac{1}{3} =$	D $\frac{12}{19} + \frac{5}{19} =$
$\frac{5}{7} - \frac{3}{7} =$	$\frac{5}{9} - \frac{4}{9} =$	$\frac{7}{15} - \frac{3}{15} =$	$\frac{17}{30} - \frac{6}{30} =$
$\frac{1}{5} + \frac{3}{5} =$	$\frac{1}{10} + \frac{7}{10} =$	$\frac{1}{11} + \frac{7}{11} =$	$\frac{2}{7} + \frac{3}{7} =$
$\frac{7}{11} - \frac{4}{11} =$	$\frac{7}{11} - \frac{5}{11} =$	$\frac{7}{10} - \frac{4}{10} =$	$\frac{11}{23} - \frac{6}{23} =$
$\frac{5}{12} + \frac{2}{12} =$	$\frac{3}{8} + \frac{4}{8} =$	$\frac{2}{19} + \frac{11}{19} =$	$\frac{7}{10} + \frac{2}{10} =$
$\frac{5}{8} - \frac{3}{8} =$	$\frac{11}{19} - \frac{5}{19} =$	$\frac{11}{20} - \frac{2}{20} =$	$\frac{6}{7} - \frac{4}{7} =$
$\frac{4}{13} + \frac{5}{13} =$	$\frac{5}{18} + \frac{7}{18} =$	$\frac{7}{17} + \frac{8}{17} =$	$\frac{1}{6} + \frac{3}{6} =$
$\frac{9}{10} - \frac{2}{10} =$	$\frac{9}{11} - \frac{5}{11} =$	$\frac{2}{3} - \frac{1}{3} =$	$\frac{9}{13} - \frac{5}{13} =$

