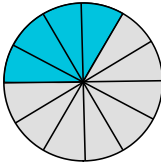


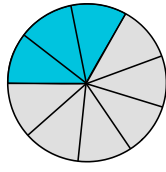
☺① Gib jeweils den Bruchteil der dunkleren Teile an.

● / 4

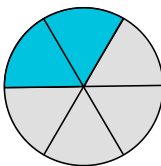
a)



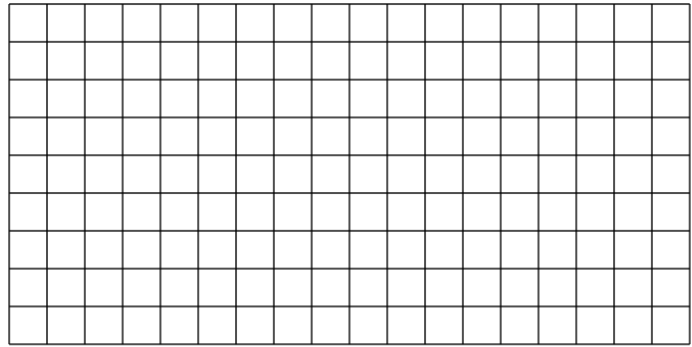
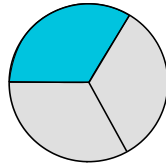
b)



c)



d)



☺② Erstelle zu den aufgeführten Brüchen jeweils eine Figur.

● / 4

a)  $\frac{1}{2}$

b)  $\frac{3}{4}$

c)  $\frac{5}{7}$

d)  $\frac{6}{10}$

☺③ Wandle in einen unechten Bruch um.


● / 8

a)  $3\frac{1}{2}$

b)  $7\frac{3}{4}$

c)  $6\frac{5}{7}$

d)  $7\frac{6}{10}$



☺④ Wandle in einen gemischte Schreibweise um.


● / 8

a)  $\frac{11}{2}$

b)  $\frac{13}{4}$

c)  $\frac{65}{7}$

d)  $\frac{99}{10}$



Note

Punkte:

/ 24

Unterschrift